








Nume :

Data:

FIȘĂ DE LUCRU  
Compararea numerelor în  
concentrul 0-5

Scrie câte elemente are fiecare mulțime, apoi colorează căsuța cu numărul mai mare din fiecare pereche:








Nume :

Data:

## FIȘĂ DE LUCRU

### Compararea numerelor în concentrul 0-5

Scrie câte elemente are fiecare mulțime, apoi colorează căsuța cu numărul mai mare din fiecare pereche:



Nume :

Data:

## FIȘĂ DE LUCRU

### Compararea numerelor în concentrul 0-5

Scrie câte elemente are fiecare mulțime, apoi colorează căsuța cu numărul mai mare din fiecare pereche:

